

# Recognising coins



**I** Match the coin to the amount.



20 pence



5 pence



10 pence



1 pound



1 pence



50 pence



2 pence



2 pounds

**2** Here are some coins.



Complete the sentences.

There are  1p coins.

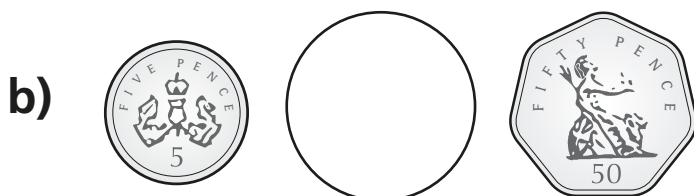
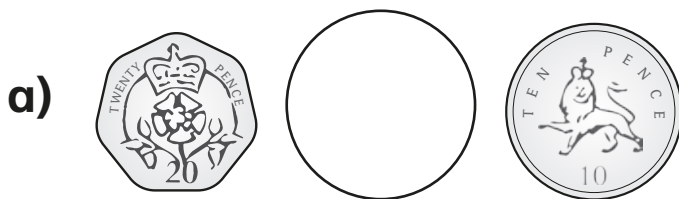
There are  2p coins.


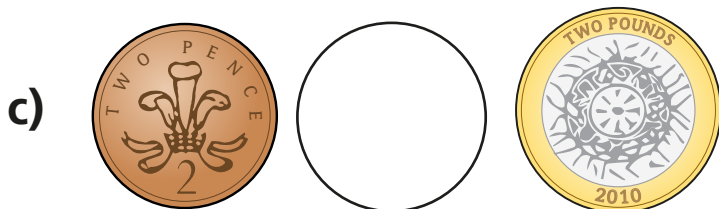
There is  5p coin.

There are  10p coins.


There are  20p coins.

**3** Write  $<$  or  $>$  to compare the amounts.






4 Mo has one coin in his hand.



I have more than 2 pence,  
but less than 1 pound.

Draw Mo's coin.

A large, empty rectangular box with a rounded top and a red border, intended for drawing the coin.

What is the value of Mo's coin?

A small square box with a black border, followed by the letter 'p' to its right, for writing the value of the coin.

Is there more than one answer?

