
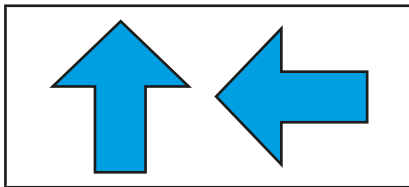


Describe turns

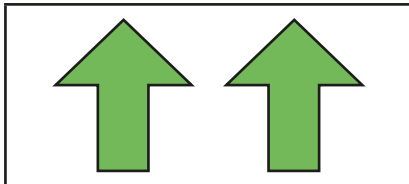
1 Match the shapes to the turns.



quarter turn





half turn



full turn

2 Draw what the shapes will look like after each turn.


a) a half turn



b) a quarter turn



c) a three-quarter turn



3 Complete the sentences to describe the turns.



quarter

half

three-quarter

full

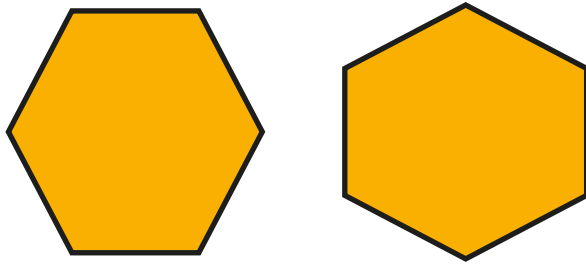
a)



The pentagon has turned

a _____ turn

b)



The hexagon has turned



a _____ turn

Is there more than one answer for each shape?




4

Kim and Mo are describing turns.



Kim

This is a
quarter turn.



Mo

This is a
three-quarter turn.

Who do you agree with? _____

Talk about it with a partner.

